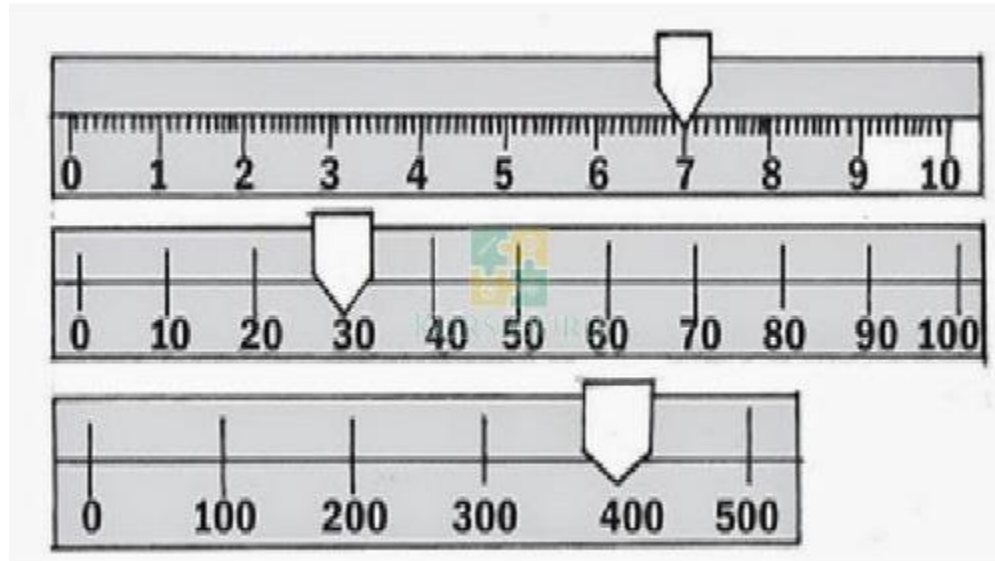


## Contoh Soal Neraca Ohaus

[Kursiguru.com](http://Kursiguru.com)

### Contoh Soal (1)



Hitunglah hasil ukur neraca Ohaus di atas!

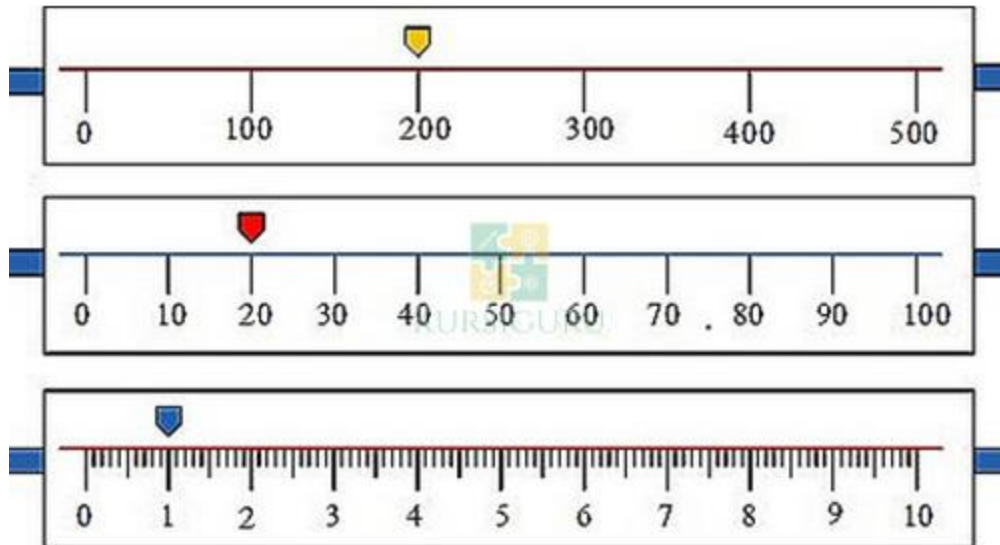
- a. 437 gr
- b. 427 gr
- c. 734 gr
- d. 347 gr
- e. 407 gr

**Jawaban : (a)**

**Pembahasan :**

Massa =  $400 + 30 + 7 = 437$  gram.

### Contoh Soal (2)



Hitunglah hasil ukur neraca Ohaus di atas!

- a. 222 gr
- b. 202 gr
- c. 122 gr
- d. 221 gr
- e. 212 gr

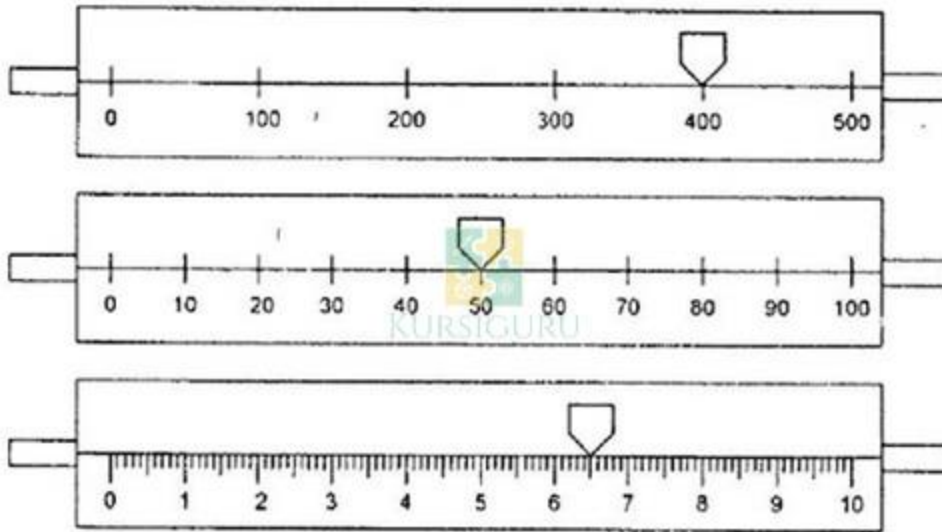
**Jawaban : (c)**

**Pembahasan :**

Massa = 200 + 20 + 1 = 221 gram.

**Contoh Soal (3)**





Hitunglah hasil ukur neraca Ohaus di atas!

- a. 456,5 gr
- b. 456,6 gr
- c. 456,7 gr
- d. 455,6 gr
- e. 456 gr


**Jawaban : (a)**

**Pembahasan :**

Massa =  $400 + 50 + 6,5 = 456,5$  gram.

**Contoh Soal (4)**





Hitunglah hasil ukur neraca Ohaus di atas!

- a. 325 gr
- b. 326 gr
- c. 324 gr
- d. 326,1 gr
- e. 325,9 gr

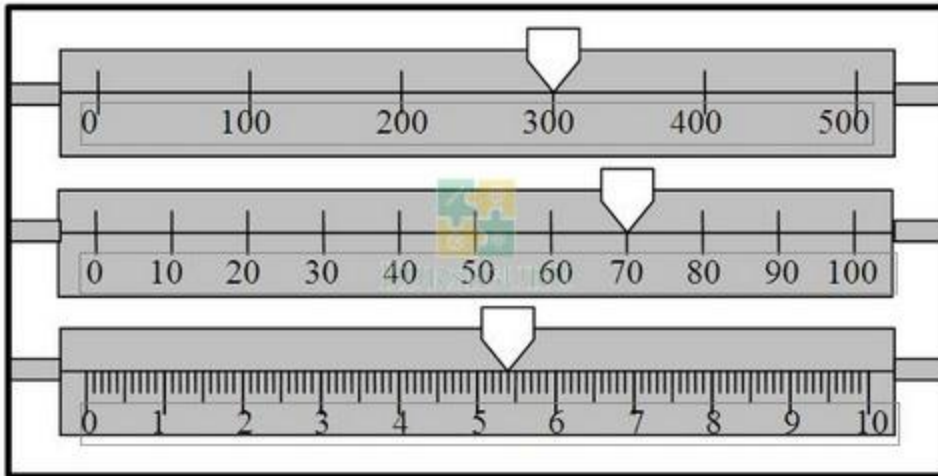
**Jawaban : (b)**

**Pembahasan :**

Massa =  $300 + 20 + 6 = 326$  gram.

**Contoh Soal (5)**





Hitunglah hasil ukur neraca Ohaus di atas!

- a. 300 gr
- b. 370 gr
- c. 375 gr
- d. 375,4 gr
- e. 375,5 gr

**Jawaban : (d)**

**Pembahasan :**

Massa =  $300 + 70 + 5,4 = 375,4$  gram.